

## BLM1612 - Circuit Theory

Prof. Dr. Nizamettin AYDIN  
[naydin@yildiz.edu.tr](mailto:naydin@yildiz.edu.tr)  
[www.yildiz.edu.tr/~naydin](http://www.yildiz.edu.tr/~naydin)

Mathematical Preliminaries  
 Nodal Analysis  
 Nodal Analysis with Supernodes  
 Mesh Analysis  
 Mesh Analysis with Supermeshes

1

## Objectives of Lecture

- Provide step-by-step instructions for nodal analysis, which is a method to calculate node voltages and currents that flow through components in a circuit.
- Provide step-by-step instructions for mesh analysis, which is a method to calculate voltage drops and mesh currents that flow around loops in a circuit.

2

## Mathematical Preliminaries

- Consider the following equations, where  $x$  and  $y$  are the unknown variables and  $a_1, a_2, b_1, b_2, c_1,$  and  $c_2$  are constants:

$$(1) \quad a_1x + b_1y = c_1$$

$$(2) \quad a_2x + b_2y = c_2$$

- Solution by **substitution**

– Rearrange (1)

$$a_1x + b_1y = c_1 \rightarrow x = \frac{c_1 - b_1y}{a_1}$$

– Substitute  $x$  into (2) to obtain  $y$

$$a_2 \frac{c_1 - b_1y}{a_1} + b_2y = c_2 \rightarrow y = \frac{a_1c_2 - a_2c_1}{a_1b_2 - a_2b_1}$$

– Find  $x$

$$x = \frac{c_1}{a_1} - \frac{b_1}{a_1} \times \frac{a_1c_2 - a_2c_1}{a_1b_2 - a_2b_1} \rightarrow x = \frac{b_1c_2 - b_2c_1}{a_1b_2 - a_2b_1}$$

3

## Mathematical Preliminaries

- Solution by **Determinant**:

– Rearrange (1) and (2) into matrix form

$$\begin{bmatrix} a_1 & b_1 \\ a_2 & b_2 \end{bmatrix} \times \begin{bmatrix} x \\ y \end{bmatrix} = \begin{bmatrix} c_1 \\ c_2 \end{bmatrix}$$

– Determinants are:

$$D = \begin{vmatrix} a_1 & b_1 \\ a_2 & b_2 \end{vmatrix} = a_1b_2 - a_2b_1$$

$$D_x = \begin{vmatrix} c_1 & b_1 \\ c_2 & b_2 \end{vmatrix} = c_1b_2 - c_2b_1$$

$$D_y = \begin{vmatrix} a_1 & c_1 \\ a_2 & c_2 \end{vmatrix} = a_1c_2 - a_2c_1$$

4

## Mathematical Preliminaries

- Using determinants, the following solutions for  $x$  and  $y$  can be found

$$x = \frac{D_x}{D} = \frac{\begin{vmatrix} c_1 & b_1 \\ c_2 & b_2 \end{vmatrix}}{\begin{vmatrix} a_1 & b_1 \\ a_2 & b_2 \end{vmatrix}} = \frac{b_1c_2 - b_2c_1}{a_1b_2 - a_2b_1}$$

$$y = \frac{D_y}{D} = \frac{\begin{vmatrix} a_1 & c_1 \\ a_2 & c_2 \end{vmatrix}}{\begin{vmatrix} a_1 & b_1 \\ a_2 & b_2 \end{vmatrix}} = \frac{a_1c_2 - a_2c_1}{a_1b_2 - a_2b_1}$$

5

## Mathematical Preliminaries

- Consider the three following simultaneous equations:

Col. 1	Col. 2	Col. 3	Col. 4
$a_1x + b_1y + c_1z = d_1$			
$a_2x + b_2y + c_2z = d_2$			
$a_3x + b_3y + c_3z = d_3$			

$$x = \frac{\begin{vmatrix} d_1 & b_1 & c_1 \\ d_2 & b_2 & c_2 \\ d_3 & b_3 & c_3 \end{vmatrix}}{D}, \quad y = \frac{\begin{vmatrix} a_1 & d_1 & c_1 \\ a_2 & d_2 & c_2 \\ a_3 & d_3 & c_3 \end{vmatrix}}{D}, \quad z = \frac{\begin{vmatrix} a_1 & b_1 & d_1 \\ a_2 & b_2 & d_2 \\ a_3 & b_3 & d_3 \end{vmatrix}}{D}$$

$$D = \begin{vmatrix} a_1 & b_1 & c_1 \\ a_2 & b_2 & c_2 \\ a_3 & b_3 & c_3 \end{vmatrix} \quad D = \begin{vmatrix} a_1 & b_1 & c_1 \\ a_2 & b_2 & c_2 \\ a_3 & b_3 & c_3 \end{vmatrix}$$

$\begin{matrix} 4(-) & 5(-) & 6(-) \\ \swarrow & \swarrow & \swarrow \\ a_1 & b_1 & c_1 \\ \searrow & \searrow & \searrow \\ a_2 & b_2 & c_2 \\ \swarrow & \swarrow & \swarrow \\ a_3 & b_3 & c_3 \\ 1(+), 2(+), 3(+) \end{matrix}$

$$D = + (a_1b_2c_3 + b_1c_2a_3 + c_1a_2b_3) - (a_3b_2c_1 + b_3c_2a_1 + c_3a_2b_1)$$

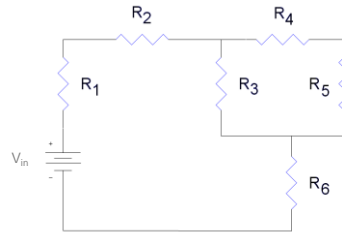
6

## Nodal Analysis

- Technique to find currents at a node using Ohm's Law and the potential differences between nodes.
  - First result from nodal analysis is the determination of node voltages (voltage at nodes referenced to ground).
    - These voltages are not equal to the voltage dropped across the resistors.
  - Second result is the calculation of the currents

7

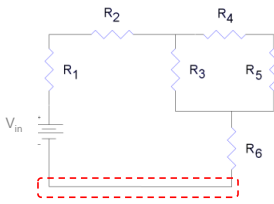
## Steps in Nodal Analysis



8

## Steps in Nodal Analysis

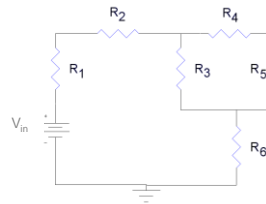
- Pick one node as a reference node
  - Its voltage will be arbitrarily defined to be zero



9

## Step 1

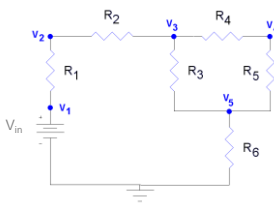
- Pick one node as a reference node
  - Its voltage will be arbitrarily defined to be zero



10

## Step 2

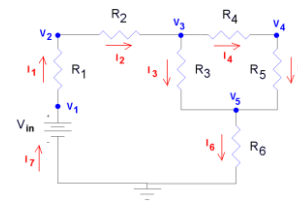
- Label the voltage at the other nodes



11

## Step 3

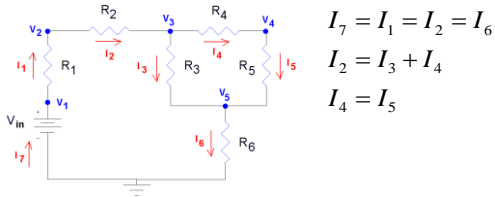
- Label the currents flowing through each of the components in the circuit



12

### Step 4

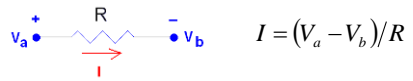
- Use Kirchoff's Current Law



13

### Step 5

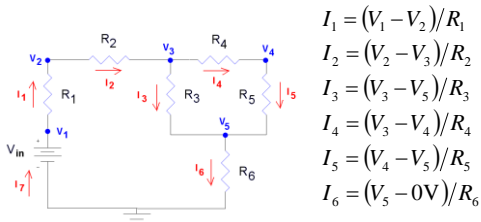
- Use Ohm's Law to relate the voltages at each node to the currents flowing in and out of them.
  - Current flows from a higher potential to a lower potential in a resistor
  - The difference in node voltage is the magnitude of electromotive force that is causing a current  $I$  to flow.



14

### Step 5

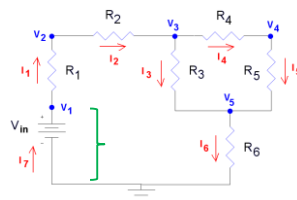
- We do not write an equation for  $I_7$  as it is equal to  $I_1$



15

### Step 6

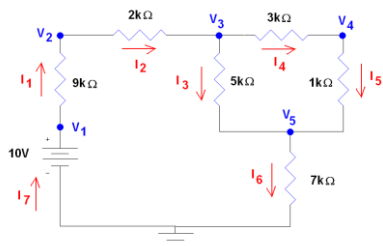
- Solve for the node voltages
  - In this problem we know that  $V_1 = V_{in}$



16

### Example 01...

- Once the node voltages are known, calculate the currents.



17

### ...Example 01...

- From Previous Slides

$$\begin{aligned}
 I_7 &= I_1 = I_2 = I_6 & I_1 &= (V_1 - V_2) / R_1 \\
 I_2 &= I_3 + I_4 & I_2 &= (V_2 - V_3) / R_2 \\
 I_4 &= I_5 & I_3 &= (V_3 - V_5) / R_3 \\
 & & I_4 &= (V_3 - V_4) / R_4 \\
 & & I_5 &= (V_4 - V_5) / R_5 \\
 & & I_6 &= (V_5 - 0V) / R_6
 \end{aligned}$$

18

### ...Example 01...

- Substituting in Numbers

$$\begin{aligned}
 I_7 = I_1 = I_2 = I_6 & & I_1 &= (10V - V_2)/9k\Omega \\
 I_2 = I_3 + I_4 & & I_2 &= (V_2 - V_3)/2k\Omega \\
 I_4 = I_5 & & I_3 &= (V_3 - V_5)/5k\Omega \\
 & & I_4 &= (V_3 - V_4)/3k\Omega \\
 V_1 = 10V & & I_5 &= (V_4 - V_5)/1k\Omega \\
 & & I_6 &= (V_5 - 0V)/7k\Omega
 \end{aligned}$$

19

### ...Example 01...

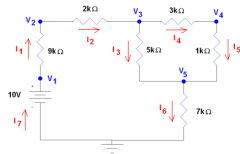
- Substituting the results from Ohm's Law into the KCL equations

$$\begin{aligned}
 (10V - V_2)/9k\Omega &= (V_2 - V_3)/2k\Omega = V_5/7k\Omega \\
 (V_2 - V_3)/2k\Omega &= (V_3 - V_5)/5k\Omega + (V_3 - V_4)/3k\Omega \\
 (V_3 - V_4)/3k\Omega &= (V_4 - V_5)/1k\Omega
 \end{aligned}$$

20

### ...Example 01...

Node Voltages	(V)
V <sub>1</sub>	10
V <sub>2</sub>	5.55
V <sub>3</sub>	4.56
V <sub>4</sub>	3.74
V <sub>5</sub>	3.46

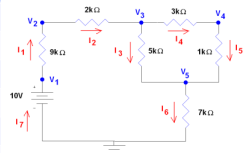


- Node voltages must have a magnitude less than the sum of the voltage sources in the circuit
- One or more of the node voltages may have a negative sign
  - This depends on which node you chose as your reference node.

21

### ...Example 01...

Voltage across resistors	(V)
V <sub>R1</sub> = (V <sub>1</sub> - V <sub>2</sub> )	4.45
V <sub>R2</sub> = (V <sub>2</sub> - V <sub>3</sub> )	0.990
V <sub>R3</sub> = (V <sub>3</sub> - V <sub>5</sub> )	1.10
V <sub>R4</sub> = (V <sub>3</sub> - V <sub>4</sub> )	0.824
V <sub>R5</sub> = (V <sub>4</sub> - V <sub>5</sub> )	0.274
V <sub>R6</sub> = (V <sub>5</sub> - 0V)	3.46



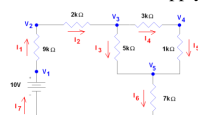
- The magnitude of any voltage across a resistor must be less than the sum of all of the voltage sources in the circuit
  - In this case, no voltage across a resistor can be greater than 10 V.

22

### ...Example 01

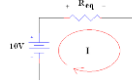
Currents	(μA)
I <sub>1</sub>	495
I <sub>2</sub>	495
I <sub>3</sub>	220
I <sub>4</sub>	275
I <sub>5</sub>	275
I <sub>6</sub>	495
I <sub>7</sub>	495

- None of the currents should be larger than the current that flows through the equivalent resistor in series with the 10V supply.



$$R_{eq} = 7 + [5 || ((1+3) + 2) + 9] = 20.2 \text{ k}\Omega$$

$$I_{eq} = 10 / R_{eq} = 10 \text{ V} / 20.2 \text{ k}\Omega = 495 \text{ }\mu\text{A}$$



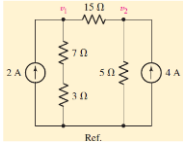
23

### Summary

- Steps in Nodal Analysis
  - Pick one node as a reference node
  - Label the voltage at the other nodes
  - Label the currents flowing through each of the components in the circuit
  - Use Kirchoff's Current Law
  - Use Ohm's Law to relate the voltages at each node to the currents flowing in and out of them.
  - Solve for the node voltage
  - Once the node voltages are known, calculate the currents.

24

### Example 02...



- Determine the current flowing left to right through the 15 ohms resistor.

$$2 = \frac{v_1}{10} + \frac{v_1 - v_2}{15} \quad 5v_1 - 2v_2 = 60$$

$$4 = \frac{v_2}{5} + \frac{v_2 - v_1}{15} \quad -v_1 + 4v_2 = 60$$

$$v_1 = 20 \text{ V} \quad v_2 = 20 \text{ V} \quad v_1 - v_2 = 0$$

zero current is flowing through the 15 Ω

25

### ...Example 02...

- Two equations with two unknown variables ( $v_1, v_2$ )

$$(1) \quad 5v_1 - 2v_2 = 60$$

$$(2) \quad -v_1 + 4v_2 = 60$$

- Solution by **substitution**

- Rearrange (2)

$$-v_1 + 4v_2 = 60 \rightarrow v_1 = 4v_2 - 60$$

- Substitute  $v_1$  into (1) to obtain  $v_2$

$$5(4v_2 - 60) + 4v_2 = 60 \rightarrow 18v_2 = 360 \rightarrow v_2 = 20 \text{ V}$$

- Find  $v_1$

$$v_1 = 4v_2 - 60 = 80 - 60 \rightarrow v_1 = 20 \text{ V}$$

26

### ...Example 02

- Two equations with two unknown variables ( $v_1, v_2$ )

$$(1) \quad 5v_1 - 2v_2 = 60$$

$$(2) \quad -v_1 + 4v_2 = 60$$

- Solution by **determinant**

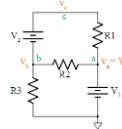
$$v_1 = \frac{\begin{vmatrix} 60 & -2 \\ 60 & 4 \end{vmatrix}}{\begin{vmatrix} 5 & -2 \\ -1 & 4 \end{vmatrix}} = \frac{60 \times 4 - 60 \times (-2)}{5 \times 4 - (-1) \times (-2)} = \frac{360}{18} = 20 \text{ V}$$

$$v_2 = \frac{\begin{vmatrix} -1 & 4 \\ 5 & 60 \end{vmatrix}}{\begin{vmatrix} 5 & -2 \\ -1 & 4 \end{vmatrix}} = \frac{5 \times 60 - (-1) \times 60}{5 \times 4 - (-1) \times (-2)} = \frac{360}{18} = 20 \text{ V}$$

27

### Nodal Analysis with Supernodes

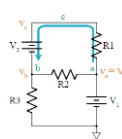
- Floating voltage source



- a voltage source that does not have either of its terminals connected to the ground node.
- A floating source is a problem for the Nodal Analysis
- In this circuit, battery  $V_2$  is floating
- Applying Nodal Analysis

$$v_a = V_1 \quad i_{R2} + i_{R3} + i_{V2} = 0 \quad \frac{(v_a - v_b)}{R2} - \frac{v_b}{R3} + i_{V2} = 0$$

- Using Supernode

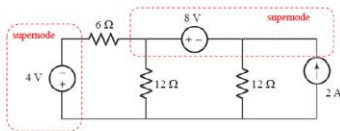


- The voltage at node  $c$   $v_c = v_b + V_2$
- battery current  $\frac{V_1 - v_c}{R1} = \frac{V_1 - (v_b + V_2)}{R1}$
- the KCL equation at node  $b$   $\frac{(V_1 - v_b)}{R2} - \frac{v_b}{R3} + \frac{V_1 - (v_b + V_2)}{R1} = 0$   $v_c = v_b + V_2$
- to find currents, Ohm's Law can be used

28

### Nodal Analysis with Supernodes

**supernode**  
a collection of multiple nodes separated by voltage sources



#### Analysis Steps

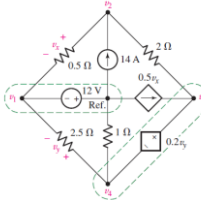
- Choose a reference node (usually ground or the bottom node) to have a voltage of zero.
- Assign a unique voltage variable to each node that is *not* the reference ( $v_1, v_2, v_3, \dots, v_{N-1}$ ).
- For independent & dependent voltage sources, identify a **supernode** and write the voltage across the supernode in terms of node voltages.  
Write a KCL equation at all  $N-1$  nodes including the supernode (and not the reference, or a supernode which includes the reference).
- Solve the  $N-1$  node equations + source equations simultaneously.

29

### Example 03...

- Determine the node-to-reference voltages in the circuit provided.

- identify the nodes & supernodes
- write KCL at each node (except the reference)



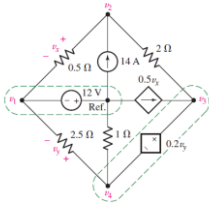
$$v_1 = -12 \text{ V}$$

$$\frac{v_2 - v_1}{0.5} + \frac{v_2 - v_3}{2} = 14$$

$$0.5v_4 = \frac{v_3 - v_2}{2} + \frac{v_4}{1} + \frac{v_4 - v_1}{2.5}$$

30

### ...Example 03



- When we relate the source voltages to the node voltages
  - $v_3 - v_4 = 0.2v_5$
  - $0.2v_5 = 0.2(v_4 - v_1)$
- When we express the dependent current source in terms of the assigned variables
  - $0.5v_2 = 0.5(v_2 - v_1)$

$$\begin{aligned} -2v_1 + 2.5v_2 - 0.5v_3 &= 14 \\ 0.1v_1 - v_2 + 0.5v_3 + 1.4v_4 &= 0 \\ v_1 &= -12 \\ 0.2v_1 + v_3 - 1.2v_4 &= 0 \end{aligned}$$

$$v_1 = -12 \text{ V}, v_2 = -4 \text{ V}, v_3 = 0 \text{ V}, \text{ and } v_4 = -2 \text{ V}.$$

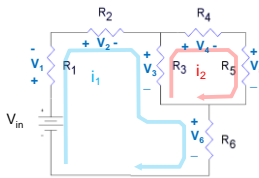
31

### Mesh Analysis

- Technique to find voltage drops within a loop using the currents that flow within the circuit and Ohm's Law
  - First result is the calculation of the current through each component
  - Second result is a calculation of either the voltages across the components or the voltage at the nodes.
- Mesh
  - the smallest loop around a subset of components in a circuit
    - Multiple meshes are defined so that every component in the circuit belongs to one or more meshes

32

### Mesh Analysis

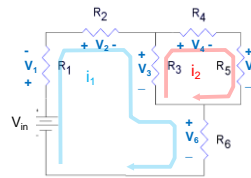


- Identify all of the meshes in the circuit
- Label the currents flowing in each mesh
- Label the voltage across each component in the circuit

- Use Kirchoff's Voltage Law
  - $-V_{in} + V_1 + V_2 + V_3 + V_6 = 0$
  - $-V_3 + V_4 + V_5 = 0$

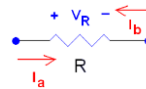
33

### Mesh Analysis



- Use Ohm's Law to relate the voltage drops across each component to the sum of the currents flowing through them.

- Follow the sign convention on the resistor's voltage.

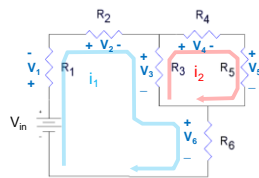


$$V_R = (I_a - I_b)R$$

34

### Mesh Analysis

- Voltage drops on the resistors:



$$\begin{aligned} V_1 &= i_1 R_1 \\ V_2 &= i_1 R_2 \\ V_3 &= (i_1 - i_2) R_3 \\ V_4 &= i_2 R_4 \\ V_5 &= i_2 R_5 \\ V_6 &= i_1 R_6 \end{aligned}$$

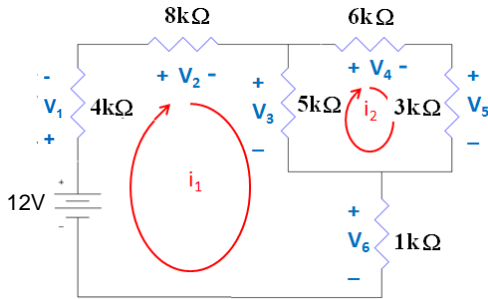
35

### Mesh Analysis

- Solve for the mesh currents,  $i_1$  and  $i_2$ 
  - These currents are related to the currents found during the nodal analysis.
    - $i_1 = I_7 = I_1 = I_2 = I_6$
    - $i_2 = I_4 = I_5$
    - $I_3 = i_1 - i_2$
- Once the voltage across all of the components are known, calculate the mesh currents.

36

### Example 04...



37

### ...Example 04...

- From Previous Slides

$$-V_{in} + V_1 + V_2 + V_3 + V_6 = 0$$

$$V_1 = i_1 R_1$$

$$V_2 = i_1 R_2$$

$$V_3 = (i_1 - i_2) R_3$$

$$V_4 = i_2 R_4$$

$$V_5 = i_2 R_5$$

$$V_6 = i_1 R_6$$

38

### ...Example 03...

- Substituting the results from Ohm's Law into the KVL equations

$$-12 + V_1 + V_2 + V_3 + V_6 = 0 \quad V_1 = i_1 (4k\Omega)$$

$$-V_3 + V_4 + V_5 = 0 \quad V_2 = i_1 (8k\Omega)$$

will result in:

Mesh Currents	( $\mu\text{A}$ )
$i_1$	740
$i_2$	264

$$V_3 = (i_1 - i_2)(5k\Omega)$$

$$V_4 = i_2 (6k\Omega)$$

$$V_5 = i_2 (3k\Omega)$$

$$V_6 = i_1 (1k\Omega)$$

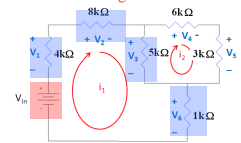
39

### ...Example 04...

Voltage across resistors	(V)
$V_{R1} = i_1 R_1$	2.96
$V_{R2} = i_1 R_2$	5.92
$V_{R3} = (i_1 - i_2) R_3$	2.39
$V_{R4} = i_2 R_4$	1.59
$V_{R5} = (V_4 - V_5)$	0.804
$V_{R6} = (V_5 - 0V)$	0.740

- The magnitude of any voltage across a resistor must be less than the sum of all of the voltage sources in the circuit

- In this case, no voltage across a resistor can be greater than 12V.



$$V_{in} = V_1 + V_2 + V_3 + V_6$$

$$12 = 2.96 + 5.92 + 2.39 + 0.74$$

$$12V = 12.01V$$

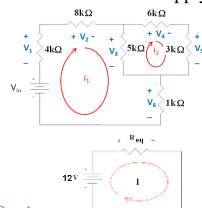
0.01 V difference is caused by rounding error

40

### ...Example 04

Currents	( $\mu\text{A}$ )
$I_{R1} = i_1$	740
$I_{R2} = i_1$	740
$I_{R3} = i_1 - i_2$	476
$I_{R4} = i_2$	264
$I_{R5} = i_2$	264
$I_{R6} = i_1$	740
$I_{V_{in}} = i_1$	740

- None of the mesh currents should be larger than the current that flows through the equivalent resistor in series with the 12V supply.



$$R_{eq} = 1 + [5 \parallel (3 + 6)] + 8 + 4 = 16.2 \text{ k}\Omega$$

$$I_{eq} = 12 / R_{eq} = 12 \text{ V} / 16.2 \text{ k}\Omega = 740 \mu\text{A}$$

41

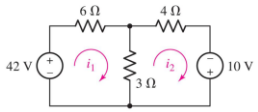
### Summary

- Steps in Mesh Analysis

1. Identify all of the meshes in the circuit
2. Label the currents flowing in each mesh
3. Label the voltage across each component in the circuit
4. Use Kirchoff's Voltage Law
5. Use Ohm's Law to relate the voltage drops across each component to the sum of the currents flowing through them.
6. Solve for the mesh currents
7. Once the voltage across all of the components are known, calculate the mesh currents.

42

### Example 05



- Determine the loop currents  $i_1$  and  $i_2$

$$-42 + 6i_1 + 3(i_1 - i_2) = 0$$

$$9i_1 - 3i_2 = 42$$

$$3(i_2 - i_1) + 4i_2 - 10 = 0$$

$$-3i_1 + 7i_2 = 10$$

$$\begin{bmatrix} 9 & -3 \\ -3 & 7 \end{bmatrix} \begin{bmatrix} i_1 \\ i_2 \end{bmatrix} = \begin{bmatrix} 42 \\ 10 \end{bmatrix}$$

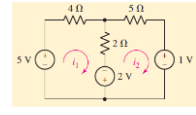
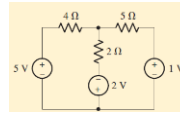
$$\begin{bmatrix} i_1 \\ i_2 \end{bmatrix} = \begin{bmatrix} 6 \\ 4 \end{bmatrix}$$

The current through the 6-Ω resistor is 6 A.  
The current through the 3-Ω resistor is  $(i_1 - i_2) = 2$  A

43

### Example 06

- Determine the power supplied by the 2 V source



Mesh 1  $-5 + 4i_1 + 2(i_1 - i_2) - 2 = 0$

$$6i_1 - 2i_2 = 7$$

Mesh 2  $+2 + 2(i_2 - i_1) + 5i_2 + 1 = 0$

$$-2i_1 + 7i_2 = -3$$

$$i_1 = \frac{43}{38} = 1.132 \text{ A}$$

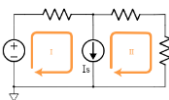
$$i_2 = -\frac{2}{19} = -0.1053 \text{ A}$$

- Power absorbed by the 2 V source  $= (2)(1.237) = -2.474 \text{ W}$   
 - Actually 2.474 W is supplied

44

### Mesh Analysis with Supermeshes

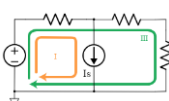
- Consider the following circuit.



- Both mesh I and mesh II go through the current source.

- It is possible to write and solve mesh equations for this configuration.

- Using supermesh



- You can drop one of the meshes and replace it with the loop that goes around both meshes, as shown here for loop III.
- You then solve the system of equations exactly the same as the Mesh Analysis

45

### Mesh Analysis with Supermeshes

supermesh = a mesh that contains multiple meshes with a shared current source

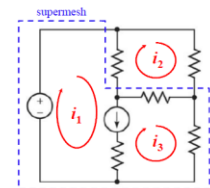
For nodal analysis, we joined nodes near a voltage source. → supernode

For mesh analysis, we join meshes near a current source. → supermesh

→ Reduces the number of simultaneous equations by the number of current sources.

#### Analysis Steps

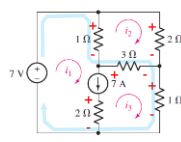
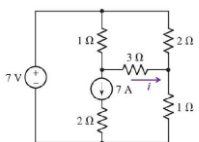
- Draw a mesh current for each mesh.
- Identify supermeshes.
- Write KVL around each supermesh, then KVL for each mesh that is not part of a supermesh.
- Express additional unknowns (dependent V/I) in terms of mesh currents.
- Solve the simultaneous equations.



46

### Example 07

- Determine the current  $i$  as labeled in the circuit.



Supermesh  $-7 + 1(i_1 - i_2) + 3(i_3 - i_2) + 1i_3 = 0$

Mesh 2  $1(i_2 - i_1) + 2i_2 + 3(i_2 - i_3) = 0$

$$-i_1 + 6i_2 - 3i_3 = 0$$

- Independent source current is related to the mesh currents

$$i_1 - i_3 = 7$$

$$i_1 = 9 \text{ A}, i_2 = 2.5 \text{ A}, i_3 = 2 \text{ A}$$

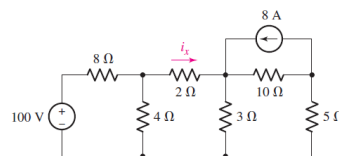
47

### Nodal vs. Mesh Analysis: A Comparison

- The following is a planar circuit with 5 nodes and 4 meshes.

- Planar circuits are circuits that can be drawn on a plane surface with no wires crossing each other.

- Determine the current  $i_x$

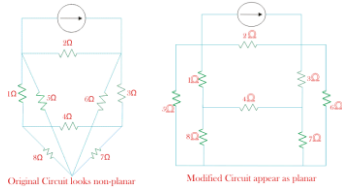


48

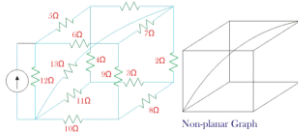


## Planar vs Non-planar circuits

- Planar



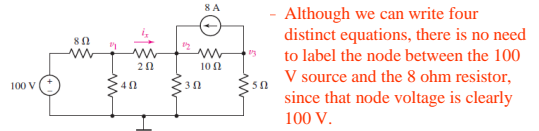
- Non-planar



49

## Nodal vs. Mesh Analysis: A Comparison

- Using Nodal Analysis



- We write the following three equations:

$$\frac{v_1 - 100}{8} + \frac{v_1}{4} + \frac{v_1 - v_2}{2} = 0 \quad \text{or} \quad 0.875v_1 - 0.5v_2 = 12.5$$

$$\frac{v_2 - v_1}{2} + \frac{v_2}{3} + \frac{v_2 - v_3}{10} - 8 = 0 \quad \text{or} \quad -0.5v_1 - 0.9333v_2 - 0.1v_3 = 8$$

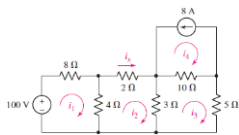
$$\frac{v_3 - v_2}{10} + \frac{v_3}{5} + 8 = 0 \quad \text{or} \quad -0.1v_2 + 0.3v_3 = -8$$

- Solving, we find that  $v_1 = 25.89 \text{ V}$   $v_2 = 20.31 \text{ V}$   $i_x = \frac{v_1 - v_2}{2} = 2.79 \text{ A}$

50

## Nodal vs. Mesh Analysis: A Comparison

- Using Mesh Analysis



- We see that we have four distinct meshes
- However it is obvious that  $i_4 = -8 \text{ A}$
- We therefore need to write three distinct equations.

- Writing a KVL equation for meshes 1, 2, and 3:

$$-100 + 8i_1 + 4(i_1 - i_2) = 0 \quad \text{or} \quad 12i_1 - 4i_2 = 100$$

$$4(i_2 - i_1) + 2i_2 + 3(i_2 - i_3) = 0 \quad \text{or} \quad -4i_1 + 9i_2 - 3i_3 = 0$$

$$3(i_3 - i_2) + 10(i_3 + 8) + 5i_3 = 0 \quad \text{or} \quad -3i_2 + 18i_3 = -80$$

- Solving, we find that  $i_2 (= i_x) = 2.79 \text{ A}$

51

52